


# SERONOK MENGIRA


OPERASI TAMBAH



Nama :

Kelas :

# OPERASI TAMBAH



Selesaikan operasi tambah di bawah dan warnakan jawapan yang betul.

 $1 + 3$ 

=

4

5

 $1 + 5$ 

=

7

6

 $1 + 8$ 

=

10

9

 $1 + 4$ 

=

5

8

 $1 + 1$ 

=

2

5

 $1 + 6$ 

=

6

7


 $1 + 7$ 

=

9

8

# OPERASI TAMBAH



Selesaikan operasi tambah di bawah dan warnakan jawapan yang betul.

$2 + 3 = \square$

$6 \quad 5$

$2 + 5 = \square$

$7 \quad 4$

$2 + 8 = \square$

$10 \quad 9$

$2 + 4 = \square$

$7 \quad 6$

$2 + 1 = \square$

$3 \quad 5$


$2 + 6 = \square$

$6 \quad 8$

$2 + 7 = \square$

$9 \quad 8$

# OPERASI TAMBAH



Selesaikan operasi tambah di bawah dan warnakan jawapan yang betul.

 $3 + 3$  $=$ 

6

9

 $3 + 5$  $=$ 

8

4

 $3 + 8$  $=$ 

10

11

 $3 + 4$  $=$ 

5

7

 $3 + 1$  $=$ 

4

5

 $3 + 6$  $=$ 

6


9

 $3 + 7$  $=$ 

9

10

# OPERASI TAMBAH



Selesaikan operasi tambah di bawah dan warnakan jawapan yang betul.

$4 + 3 = \square$

8	9
---	---

$4 + 5 = \square$

8	9
---	---

$4 + 8 = \square$

12	11
----	----

$4 + 4 = \square$

8	7
---	---

$4 + 1 = \square$

4	5
---	---


$4 + 6 = \square$

10	9
----	---

$4 + 7 = \square$

11	10
----	----

# OPERASI TAMBAH



Selesaikan operasi tambah di bawah dan warnakan jawapan yang betul.

5 + 3

=

8

9

5 + 5

=

10

9

5 + 8

=

12

13

5 + 4

=

8

9

5 + 1

=

6

5

5 + 6

=

10

11


5 + 7

=

10

12

# OPERASI TAMBAH



Selesaikan operasi tambah di bawah dan warnakan jawapan yang betul.

$6 + 3 = \square$

9	7
---	---

$6 + 5 = \square$

11	9
----	---

$6 + 8 = \square$

14	16
----	----

$6 + 4 = \square$

10	9
----	---

$6 + 1 = \square$

7	8
---	---


$6 + 6 = \square$

12	10
----	----

$6 + 7 = \square$

13	11
----	----

# OPERASI TAMBAH



Selesaikan operasi tambah di bawah dan warnakan jawapan yang betul.

$7 + 3 = \square$

10	7
----	---

$7 + 5 = \square$

11	12
----	----

$7 + 8 = \square$

15	16
----	----

$7 + 4 = \square$

10	11
----	----

$7 + 1 = \square$

10	8
----	---

$7 + 6 = \square$


12	13
----	----

$7 + 7 = \square$

13	14
----	----



# OPERASI TAMBAH



Selesaikan operasi tambah di bawah dan warnakan jawapan yang betul.

8 + 3

=

10

11

8 + 5

=

13

12

8 + 8

=

15

16

8 + 4

=

12

14

8 + 1

=

10

9

8 + 6

=

14

13


8 + 7

=

15

14

# OPERASI TAMBAH



Selesaikan operasi tambah di bawah dan warnakan jawapan yang betul.

$9 + 3$

=

12

11

$9 + 5$

=

13

14

$9 + 8$

=

15

17

$9 + 4$

=

13

14

$9 + 1$

=

10

11

$9 + 6$

=

15

13


$9 + 7$

=

16

14

# OPERASI TAMBAH



Selesaikan operasi tambah di bawah dan warnakan jawapan yang betul.

 $1 + 3$  $=$ 

4

6

 $2 + 5$  $=$ 

8

7

 $3 + 2$  $=$ 

5

7

 $4 + 4$  $=$ 

9

8

 $5 + 1$  $=$ 

7

6

 $6 + 9$  $=$ 

15

13

 $7 + 7$  $=$ 

16

14