

PRESCHOOL

MATH

7

7 - 1

=

8

2



Name: \_\_\_\_\_

Date: \_\_\_\_\_

# Count to 100

Fill in the missing numbers and count to 100.  
Enjoy this fun activity. Yes you can count!

1	2		4	5			8		10
11		13			16		18	19	
21	22		24		26	27		29	30
		33	34	35		37		39	
41	42			45		47	48		50
51		53	54	55	56			59	60
61	62	63		65		67			70
71		73	74		76		78		
	82	83		85	86	87	88		90
91			94	95		97		99	

Name: \_\_\_\_\_

## ADDITION

Add the numbers shown on the hands and write the answer in the space provided.



Name: \_\_\_\_\_



## SUBTRACTION

Complete the equation shown on the hands and write the answer in the space provided.



Name: \_\_\_\_\_



## SUBTRACTION

Complete the equation shown on the hands and write the answer in the space provided.



Name

Teacher

Class

Date

# Apple Additions

Add the apples together. Write the sum on the line.

$$\begin{array}{c} \text{Apple} \quad \text{Apple} \quad + \quad \text{Apple} \quad \text{Apple} \quad \text{Apple} \quad = \quad \underline{\hspace{2cm}} \end{array}$$

$$\begin{array}{c} \text{Apple} \quad + \quad \text{Apple} \quad \text{Apple} \quad = \quad \underline{\hspace{2cm}} \end{array}$$

$$\begin{array}{c} \text{Apple} \quad \text{Apple} \quad + \quad \text{Apple} \quad \text{Apple} \quad = \quad \underline{\hspace{2cm}} \end{array}$$

$$\begin{array}{c} \text{Apple} \quad + \quad \text{Apple} \quad = \quad \underline{\hspace{2cm}} \end{array}$$

$$\begin{array}{c} \text{Apple} \quad \text{Apple} \quad \text{Apple} \quad \text{Apple} \quad + \quad \text{Apple} \quad = \quad \underline{\hspace{2cm}} \end{array}$$



Name: \_\_\_\_\_


Teacher: \_\_\_\_\_

Grade & Section: \_\_\_\_\_


Date: \_\_\_\_\_

# Love Insects

Directions: Count the insects in each group. Read the problem and then combine the groups to find the answer.



$$3 + 2 = \underline{\quad}$$



$$1 + 1 = \underline{\quad}$$




$$2 + 2 = \underline{\quad}$$



$$1 + 2 = \underline{\quad}$$



$$1 + 0 = \underline{\quad}$$



$$3 + 1 = \underline{\quad}$$



Name \_\_\_\_\_

## APPLE COUNTING

Count the number of seeds in the apples below and circle the correct number.



1 4 6



5 7 9



2 8 3



9 2 5





3 1 7



8 6 4



6 9 5



8 7 9



3 5 4



Name: \_\_\_\_\_


Date: \_\_\_\_\_

# Count & Mark


Count and color the butterfly elements in each box,  
mark the correct number




8 7 9 6



4 3 6 5



5 4 3 6



2 3 8 7

Name: \_\_\_\_\_


Date: \_\_\_\_\_

# Count & Mark

Count and color the butterfly elements in each box,  
mark the correct number




10 11 12 13



7 6 8 5



5 7 8 6



2 3 5 4

Name: \_\_\_\_\_


Date: \_\_\_\_\_

# Count & Mark


Count and color the butterfly elements in each box,  
mark the correct number




2 1 3 0



6 4 7 5



5 4 3 6



2 3 5 1