

NAMA:

TARIKH

KELAS

MARKAH

ROKET TAMBAH

Selesaikan ayat matematik tambah.



NAMA:

TARIKH

KELAS

MARKAH

ROKET TAMBAH

Selesaikan ayat matematik tambah.



$13 + 5$
=



$8 + 17$
=



$19 + 4$
=



$6 + 13$
=



$7 + 19$
=



$11 + 8$
=



$9 + 10$
=



$5 + 14$
=



$13 + 8$
=



$8 + 16$
=



$13 + 8$
=



$19 + 2$
=

NAMA:

TARIKH

KELAS

MARKAH

ROKET TAMBAH

Selesaikan ayat matematik tambah.



NAMA:

TARIKH

KELAS

MARKAH

ROKET TAMBAH

Selesaikan ayat matematik tambah.



$3 + 11$
=



$1 + 12$
=



$12 + 3$
=



$1 + 13$
=



$4 + 12$
=



$1 + 15$
=



$12 + 2$
=



$13 + 4$
=



$3 + 16$
=



$14 + 4$
=



$4 + 16$
=



$15 + 4$
=

Nama _____

Tarikh _____

Kelas _____

Jom tambah



$$\begin{array}{r} 16 \\ + 3 \\ \hline \end{array}$$

$$\begin{array}{r} 17 \\ + 5 \\ \hline \end{array}$$

$$\begin{array}{r} 18 \\ + 3 \\ \hline \end{array}$$

$$\begin{array}{r} 18 \\ + 2 \\ \hline \end{array}$$

$$\begin{array}{r} 8 \\ + 17 \\ \hline \end{array}$$

$$\begin{array}{r} 16 \\ + 6 \\ \hline \end{array}$$

$$\begin{array}{r} 3 \\ + 12 \\ \hline \end{array}$$

$$\begin{array}{r} 5 \\ + 12 \\ \hline \end{array}$$

$$\begin{array}{r} 17 \\ + 3 \\ \hline \end{array}$$

$$\begin{array}{r} 9 \\ + 15 \\ \hline \end{array}$$

$$\begin{array}{r} 18 \\ + 8 \\ \hline \end{array}$$

$$\begin{array}{r} 17 \\ + 7 \\ \hline \end{array}$$

$$\begin{array}{r} 15 \\ + 2 \\ \hline \end{array}$$

$$\begin{array}{r} 9 \\ + 14 \\ \hline \end{array}$$

$$\begin{array}{r} 18 \\ + 3 \\ \hline \end{array}$$

$$\begin{array}{r} 9 \\ + 13 \\ \hline \end{array}$$

Nama _____

Tarikh _____

Kelas _____

Jom tambah



$$\begin{array}{r} 6 \\ + 3 \\ \hline \end{array}$$

$$\begin{array}{r} 7 \\ + 5 \\ \hline \end{array}$$

$$\begin{array}{r} 8 \\ + 3 \\ \hline \end{array}$$

$$\begin{array}{r} 8 \\ + 2 \\ \hline \end{array}$$

$$\begin{array}{r} 8 \\ + 7 \\ \hline \end{array}$$

$$\begin{array}{r} 6 \\ + 6 \\ \hline \end{array}$$

$$\begin{array}{r} 3 \\ + 2 \\ \hline \end{array}$$

$$\begin{array}{r} 5 \\ + 2 \\ \hline \end{array}$$

$$\begin{array}{r} 7 \\ + 3 \\ \hline \end{array}$$

$$\begin{array}{r} 9 \\ + 5 \\ \hline \end{array}$$

$$\begin{array}{r} 8 \\ + 8 \\ \hline \end{array}$$

$$\begin{array}{r} 7 \\ + 7 \\ \hline \end{array}$$

$$\begin{array}{r} 5 \\ + 2 \\ \hline \end{array}$$

$$\begin{array}{r} 9 \\ + 4 \\ \hline \end{array}$$


$$\begin{array}{r} 8 \\ + 3 \\ \hline \end{array}$$

$$\begin{array}{r} 9 \\ + 3 \\ \hline \end{array}$$

Nama _____

Kelas _____

tambah satu digit



Mari belajar menambahkan.

$$\begin{array}{r} 9 \\ +4 \\ \hline \end{array}$$

$$\begin{array}{r} 8 \\ +4 \\ \hline \end{array}$$

$$\begin{array}{r} 5 \\ +7 \\ \hline \end{array}$$

$$\begin{array}{r} 9 \\ +8 \\ \hline \end{array}$$

$$\begin{array}{r} 7 \\ +7 \\ \hline \end{array}$$

$$\begin{array}{r} 8 \\ +8 \\ \hline \end{array}$$

$$\begin{array}{r} 9 \\ +9 \\ \hline \end{array}$$

$$\begin{array}{r} 6 \\ +6 \\ \hline \end{array}$$

$$\begin{array}{r} 6 \\ +8 \\ \hline \end{array}$$

$$\begin{array}{r} 8 \\ +7 \\ \hline \end{array}$$

$$\begin{array}{r} 9 \\ +7 \\ \hline \end{array}$$

$$\begin{array}{r} 7 \\ +4 \\ \hline \end{array}$$

$$\begin{array}{r} 5 \\ +8 \\ \hline \end{array}$$

$$\begin{array}{r} 2 \\ +9 \\ \hline \end{array}$$


$$\begin{array}{r} 4 \\ +9 \\ \hline \end{array}$$

$$\begin{array}{r} 6 \\ +7 \\ \hline \end{array}$$

Nama _____

Kelas _____

tambah satu digit



Mari belajar menambahkan.

$$\begin{array}{r} 6 \\ +3 \\ \hline \end{array}$$

$$\begin{array}{r} 2 \\ +4 \\ \hline \end{array}$$

$$\begin{array}{r} 5 \\ +1 \\ \hline \end{array}$$

$$\begin{array}{r} 8 \\ +2 \\ \hline \end{array}$$

$$\begin{array}{r} 7 \\ +3 \\ \hline \end{array}$$

$$\begin{array}{r} 2 \\ +7 \\ \hline \end{array}$$

$$\begin{array}{r} 9 \\ +1 \\ \hline \end{array}$$

$$\begin{array}{r} 5 \\ +2 \\ \hline \end{array}$$

$$\begin{array}{r} 6 \\ +4 \\ \hline \end{array}$$

$$\begin{array}{r} 2 \\ +2 \\ \hline \end{array}$$

$$\begin{array}{r} 5 \\ +7 \\ \hline \end{array}$$

$$\begin{array}{r} 7 \\ +2 \\ \hline \end{array}$$

$$\begin{array}{r} 5 \\ +3 \\ \hline \end{array}$$

$$\begin{array}{r} 2 \\ +9 \\ \hline \end{array}$$

$$\begin{array}{r} 4 \\ +1 \\ \hline \end{array}$$

$$\begin{array}{r} 5 \\ +7 \\ \hline \end{array}$$

Nama _____

Tarikh _____

Kelas _____

CARI NOMBOR YANG HILANG



Lengkapkan ayat matematik ini.

$9 + \underline{\quad} = 12$

$2 + \underline{\quad} = 8$

$5 + \underline{\quad} = 15$

$8 + \underline{\quad} = 16$

$2 + \underline{\quad} = 12$

$3 + \underline{\quad} = 9$

$7 + \underline{\quad} = 10$

$9 + \underline{\quad} = 11$

$4 + \underline{\quad} = 7$

$5 + \underline{\quad} = 13$

Nama _____

Tarikh _____

Kelas _____

CARI NOMBOR YANG HILANG



Lengkapkan ayat matematik ini.

$8 + \underline{\quad} = 16$

$9 + \underline{\quad} = 17$

$9 + \underline{\quad} = 15$

$9 + \underline{\quad} = 18$

$7 + \underline{\quad} = 19$

$10 + \underline{\quad} = 19$

$10 + \underline{\quad} = 20$

$8 + \underline{\quad} = 17$

$8 + \underline{\quad} = 17$

$8 + \underline{\quad} = 15$

Nama _____

Tarikh _____

Kelas _____

CARI NOMBOR YANG HILANG



Lengkapkan ayat matematik ini.

$2 + \underline{\quad} = 3$

$2 + \underline{\quad} = 5$

$1 + \underline{\quad} = 2$

$2 + \underline{\quad} = 7$

$2 + \underline{\quad} = 4$

$6 + \underline{\quad} = 7$

$4 + \underline{\quad} = 5$

$4 + \underline{\quad} = 6$

$2 + \underline{\quad} = 6$

$3 + \underline{\quad} = 8$

Nama _____

Tarikh _____

Kelas _____

CARI NOMBOR YANG HILANG



Lengkapkan ayat matematik ini.

$2 + \underline{\quad} = 8$

$6 + \underline{\quad} = 12$

$9 + \underline{\quad} = 10$

$7 + \underline{\quad} = 11$

$4 + \underline{\quad} = 11$

$6 + \underline{\quad} = 12$

$3 + \underline{\quad} = 9$

$6 + \underline{\quad} = 11$

$6 + \underline{\quad} = 10$

$8 + \underline{\quad} = 13$

Nama _____

Tarikh _____

Kelas _____

TITIK HILANG

Lengkapkan ayat matematik ini.

$$\begin{array}{|c|} \hline \bullet \\ \hline \bullet \\ \hline \end{array} + \begin{array}{|c|} \hline \\ \hline \\ \hline \end{array} = 6$$

$$\begin{array}{|c|} \hline \bullet \bullet \\ \hline \bullet \bullet \\ \hline \end{array} + \begin{array}{|c|} \hline \\ \hline \\ \hline \end{array} = 5$$

$$\begin{array}{|c|} \hline \\ \hline \\ \hline \end{array} + \begin{array}{|c|} \hline \bullet \\ \hline \bullet \\ \hline \bullet \\ \hline \end{array} = 8$$

$$\begin{array}{|c|} \hline \\ \hline \\ \hline \end{array} + \begin{array}{|c|} \hline \bullet \bullet \\ \hline \bullet \bullet \\ \hline \bullet \bullet \\ \hline \end{array} = 7$$

$$\begin{array}{|c|} \hline \bullet \\ \hline \\ \hline \end{array} + \begin{array}{|c|} \hline \\ \hline \\ \hline \end{array} = 4$$

$$\begin{array}{|c|} \hline \bullet \\ \hline \bullet \\ \hline \bullet \\ \hline \end{array} + \begin{array}{|c|} \hline \\ \hline \\ \hline \end{array} = 6$$

$$\begin{array}{|c|} \hline \\ \hline \\ \hline \end{array} + \begin{array}{|c|} \hline \bullet \\ \hline \\ \hline \bullet \\ \hline \end{array} = 3$$

$$\begin{array}{|c|} \hline \\ \hline \\ \hline \end{array} + \begin{array}{|c|} \hline \bullet \bullet \\ \hline \bullet \\ \hline \bullet \bullet \\ \hline \end{array} = 8$$

$$\begin{array}{|c|} \hline \bullet \\ \hline \\ \hline \end{array} + \begin{array}{|c|} \hline \\ \hline \\ \hline \end{array} = 2$$

$$\begin{array}{|c|} \hline \bullet \bullet \\ \hline \bullet \bullet \\ \hline \end{array} + \begin{array}{|c|} \hline \\ \hline \\ \hline \end{array} = 9$$

Nama _____

Tarikh _____

Kelas _____

TITIK HILANG

Lengkapkan ayat matematik ini.

$$\begin{array}{|c|} \hline \bullet \\ \bullet \\ \bullet \\ \hline \end{array} + \begin{array}{|c|} \hline \\ \hline \end{array} = 6$$

$$\begin{array}{|c|} \hline \bullet \bullet \\ \bullet \bullet \\ \bullet \bullet \\ \hline \end{array} + \begin{array}{|c|} \hline \\ \hline \end{array} = 7$$

$$\begin{array}{|c|} \hline \\ \hline \end{array} + \begin{array}{|c|} \hline \bullet \\ \bullet \\ \hline \end{array} = 8$$

$$\begin{array}{|c|} \hline \\ \hline \end{array} + \begin{array}{|c|} \hline \bullet \bullet \\ \bullet \bullet \\ \hline \end{array} = 7$$

$$\begin{array}{|c|} \hline \bullet \\ \bullet \\ \hline \end{array} + \begin{array}{|c|} \hline \\ \hline \end{array} = 4$$

$$\begin{array}{|c|} \hline \bullet \bullet \\ \bullet \\ \bullet \bullet \\ \hline \end{array} + \begin{array}{|c|} \hline \\ \hline \end{array} = 6$$

$$\begin{array}{|c|} \hline \\ \hline \end{array} + \begin{array}{|c|} \hline \bullet \\ \hline \end{array} = 3$$

$$\begin{array}{|c|} \hline \\ \hline \end{array} + \begin{array}{|c|} \hline \bullet \\ \bullet \\ \bullet \\ \hline \end{array} = 8$$

$$\begin{array}{|c|} \hline \bullet \\ \hline \end{array} + \begin{array}{|c|} \hline \\ \hline \end{array} = 6$$


$$\begin{array}{|c|} \hline \bullet \bullet \\ \bullet \bullet \\ \hline \end{array} + \begin{array}{|c|} \hline \\ \hline \end{array} = 8$$

Nama: _____

Tarikh: _____

Kelas: _____

Mari Pandai Tambah




$\begin{array}{r} 16 \\ +13 \\ \hline \end{array}$	$\begin{array}{r} 18 \\ +17 \\ \hline \end{array}$	$\begin{array}{r} 21 \\ +15 \\ \hline \end{array}$	$\begin{array}{r} 34 \\ +22 \\ \hline \end{array}$
$\begin{array}{r} 56 \\ +15 \\ \hline \end{array}$	$\begin{array}{r} 44 \\ +31 \\ \hline \end{array}$	$\begin{array}{r} 70 \\ +21 \\ \hline \end{array}$	$\begin{array}{r} 38 \\ +12 \\ \hline \end{array}$
$\begin{array}{r} 81 \\ +43 \\ \hline \end{array}$	$\begin{array}{r} 90 \\ +13 \\ \hline \end{array}$	$\begin{array}{r} 25 \\ +32 \\ \hline \end{array}$	$\begin{array}{r} 36 \\ +53 \\ \hline \end{array}$
$\begin{array}{r} 18 \\ +93 \\ \hline \end{array}$	$\begin{array}{r} 68 \\ +24 \\ \hline \end{array}$	$\begin{array}{r} 53 \\ +12 \\ \hline \end{array}$	$\begin{array}{r} 74 \\ +32 \\ \hline \end{array}$
$\begin{array}{r} 62 \\ +52 \\ \hline \end{array}$	$\begin{array}{r} 94 \\ +23 \\ \hline \end{array}$	$\begin{array}{r} 22 \\ +71 \\ \hline \end{array}$	$\begin{array}{r} 68 \\ +40 \\ \hline \end{array}$

Nama: _____

Tarikh: _____

Kelas: _____

Mari Pandai Tambah




$\begin{array}{r} 51 \\ +61 \\ \hline \end{array}$	$\begin{array}{r} 52 \\ +67 \\ \hline \end{array}$	$\begin{array}{r} 64 \\ +57 \\ \hline \end{array}$	$\begin{array}{r} 69 \\ +52 \\ \hline \end{array}$
$\begin{array}{r} 72 \\ +69 \\ \hline \end{array}$	$\begin{array}{r} 64 \\ +79 \\ \hline \end{array}$	$\begin{array}{r} 77 \\ +67 \\ \hline \end{array}$	$\begin{array}{r} 68 \\ +74 \\ \hline \end{array}$
$\begin{array}{r} 89 \\ +79 \\ \hline \end{array}$	$\begin{array}{r} 85 \\ +75 \\ \hline \end{array}$	$\begin{array}{r} 75 \\ +82 \\ \hline \end{array}$	$\begin{array}{r} 78 \\ +81 \\ \hline \end{array}$
$\begin{array}{r} 98 \\ +83 \\ \hline \end{array}$	$\begin{array}{r} 88 \\ +97 \\ \hline \end{array}$	$\begin{array}{r} 83 \\ +92 \\ \hline \end{array}$	$\begin{array}{r} 99 \\ +88 \\ \hline \end{array}$
$\begin{array}{r} 92 \\ +90 \\ \hline \end{array}$	$\begin{array}{r} 95 \\ +99 \\ \hline \end{array}$	$\begin{array}{r} 91 \\ +91 \\ \hline \end{array}$	$\begin{array}{r} 98 \\ +92 \\ \hline \end{array}$

Nama: _____

Tarikh: _____

Kelas: _____

Mari Pandai Tambah



$\begin{array}{r} 11 \\ +11 \\ \hline \end{array}$	$\begin{array}{r} 12 \\ +13 \\ \hline \end{array}$	$\begin{array}{r} 14 \\ +12 \\ \hline \end{array}$	$\begin{array}{r} 19 \\ +12 \\ \hline \end{array}$
$\begin{array}{r} 22 \\ +16 \\ \hline \end{array}$	$\begin{array}{r} 14 \\ +22 \\ \hline \end{array}$	$\begin{array}{r} 17 \\ +27 \\ \hline \end{array}$	$\begin{array}{r} 18 \\ +24 \\ \hline \end{array}$
$\begin{array}{r} 31 \\ +21 \\ \hline \end{array}$	$\begin{array}{r} 20 \\ +33 \\ \hline \end{array}$	$\begin{array}{r} 35 \\ +22 \\ \hline \end{array}$	$\begin{array}{r} 36 \\ +25 \\ \hline \end{array}$
$\begin{array}{r} 48 \\ +33 \\ \hline \end{array}$	$\begin{array}{r} 38 \\ +44 \\ \hline \end{array}$	$\begin{array}{r} 43 \\ +32 \\ \hline \end{array}$	$\begin{array}{r} 44 \\ +37 \\ \hline \end{array}$
$\begin{array}{r} 52 \\ +42 \\ \hline \end{array}$	$\begin{array}{r} 57 \\ +43 \\ \hline \end{array}$	$\begin{array}{r} 41 \\ +51 \\ \hline \end{array}$	$\begin{array}{r} 58 \\ +49 \\ \hline \end{array}$

Nama _____

Tarikh _____

Kelas _____

Mari Menambah

$$\begin{array}{r} 314 \\ 5 \\ + 23 \\ \hline \end{array}$$

$$\begin{array}{r} 200 \\ 40 \\ + 22 \\ \hline \end{array}$$

$$\begin{array}{r} 282 \\ 62 \\ + 94 \\ \hline \end{array}$$

$$\begin{array}{r} 88 \\ 7 \\ + 165 \\ \hline \end{array}$$

$$\begin{array}{r} 414 \\ 13 \\ + 412 \\ \hline \end{array}$$

$$\begin{array}{r} 57 \\ 365 \\ + 22 \\ \hline \end{array}$$

$$\begin{array}{r} 63 \\ 215 \\ + 19 \\ \hline \end{array}$$

$$\begin{array}{r} 174 \\ 22 \\ + 45 \\ \hline \end{array}$$

$$\begin{array}{r} 812 \\ 63 \\ + 320 \\ \hline \end{array}$$

$$\begin{array}{r} 22 \\ 95 \\ + 122 \\ \hline \end{array}$$

$$\begin{array}{r} 36 \\ 152 \\ + 92 \\ \hline \end{array}$$

$$\begin{array}{r} 471 \\ 122 \\ + 54 \\ \hline \end{array}$$

Nama _____

Tarikh _____

Kelas _____

Mari Menambah

$$\begin{array}{r} 54 \\ 56 \\ + 4 \\ \hline \end{array}$$

$$\begin{array}{r} 60 \\ 10 \\ + 22 \\ \hline \end{array}$$

$$\begin{array}{r} 54 \\ 32 \\ + 34 \\ \hline \end{array}$$

$$\begin{array}{r} 88 \\ 47 \\ + 54 \\ \hline \end{array}$$

$$\begin{array}{r} 34 \\ 33 \\ + 73 \\ \hline \end{array}$$

$$\begin{array}{r} 37 \\ 95 \\ + 24 \\ \hline \end{array}$$

$$\begin{array}{r} 88 \\ 29 \\ + 25 \\ \hline \end{array}$$

$$\begin{array}{r} 99 \\ 72 \\ + 25 \\ \hline \end{array}$$

$$\begin{array}{r} 282 \\ 93 \\ + 398 \\ \hline \end{array}$$

$$\begin{array}{r} 42 \\ 91 \\ + 192 \\ \hline \end{array}$$

$$\begin{array}{r} 96 \\ 32 \\ + 89 \\ \hline \end{array}$$

$$\begin{array}{r} 74 \\ 732 \\ + 84 \\ \hline \end{array}$$

$$\begin{array}{r} 9 \\ + 5 \\ \hline \end{array}$$

$$\begin{array}{r} 8 \\ + 6 \\ \hline \end{array}$$

$$\begin{array}{r} 7 \\ + 6 \\ \hline \end{array}$$

$$\begin{array}{r} 9 \\ + 8 \\ \hline \end{array}$$

$$\begin{array}{r} 9 \\ + 5 \\ \hline \end{array}$$

$$\begin{array}{r} 6 \\ + 5 \\ \hline \end{array}$$

$$\begin{array}{r} 6 \\ + 7 \\ \hline \end{array}$$

$$\begin{array}{r} 9 \\ + 8 \\ \hline \end{array}$$

$$\begin{array}{r} 8 \\ + 5 \\ \hline \end{array}$$

$$\begin{array}{r} 8 \\ + 7 \\ \hline \end{array}$$

$$\begin{array}{r} 2 \\ + 1 \\ \hline \end{array}$$

$$\begin{array}{r} 2 \\ + 5 \\ \hline \end{array}$$

$$\begin{array}{r} 6 \\ + 3 \\ \hline \end{array}$$

$$\begin{array}{r} 2 \\ + 7 \\ \hline \end{array}$$

$$\begin{array}{r} 1 \\ + 5 \\ \hline \end{array}$$

$$\begin{array}{r} 2 \\ + 2 \\ \hline \end{array}$$

$$\begin{array}{r} 1 \\ + 7 \\ \hline \end{array}$$

$$\begin{array}{r} 3 \\ + 5 \\ \hline \end{array}$$

$$\begin{array}{r} 4 \\ + 3 \\ \hline \end{array}$$

$$\begin{array}{r} 4 \\ + 5 \\ \hline \end{array}$$

$$\begin{array}{r} 1 \\ + 1 \\ \hline \end{array}$$

$$\begin{array}{r} 2 \\ + 3 \\ \hline \end{array}$$

$$\begin{array}{r} 1 \\ + 3 \\ \hline \end{array}$$

$$\begin{array}{r} 2 \\ + 4 \\ \hline \end{array}$$

$$\begin{array}{r} 1 \\ + 4 \\ \hline \end{array}$$

$$\begin{array}{r} 2 \\ + 5 \\ \hline \end{array}$$

$$\begin{array}{r} 2 \\ + 7 \\ \hline \end{array}$$

$$\begin{array}{r} 3 \\ + 3 \\ \hline \end{array}$$

$$\begin{array}{r} 4 \\ + 4 \\ \hline \end{array}$$

$$\begin{array}{r} 4 \\ + 3 \\ \hline \end{array}$$

$$\begin{array}{r} 5 \\ + 5 \\ \hline \end{array}$$

$$\begin{array}{r} 6 \\ + 6 \\ \hline \end{array}$$

$$\begin{array}{r} 7 \\ + 7 \\ \hline \end{array}$$

$$\begin{array}{r} 8 \\ + 8 \\ \hline \end{array}$$

$$\begin{array}{r} 9 \\ + 9 \\ \hline \end{array}$$

$$\begin{array}{r} 7 \\ + 4 \\ \hline \end{array}$$

$$\begin{array}{r} 1 \\ + 9 \\ \hline \end{array}$$

$$\begin{array}{r} 3 \\ + 8 \\ \hline \end{array}$$

$$\begin{array}{r} 6 \\ + 5 \\ \hline \end{array}$$

$$\begin{array}{r} 4 \\ + 7 \\ \hline \end{array}$$